


I'm not robot  reCAPTCHA

**Continue**

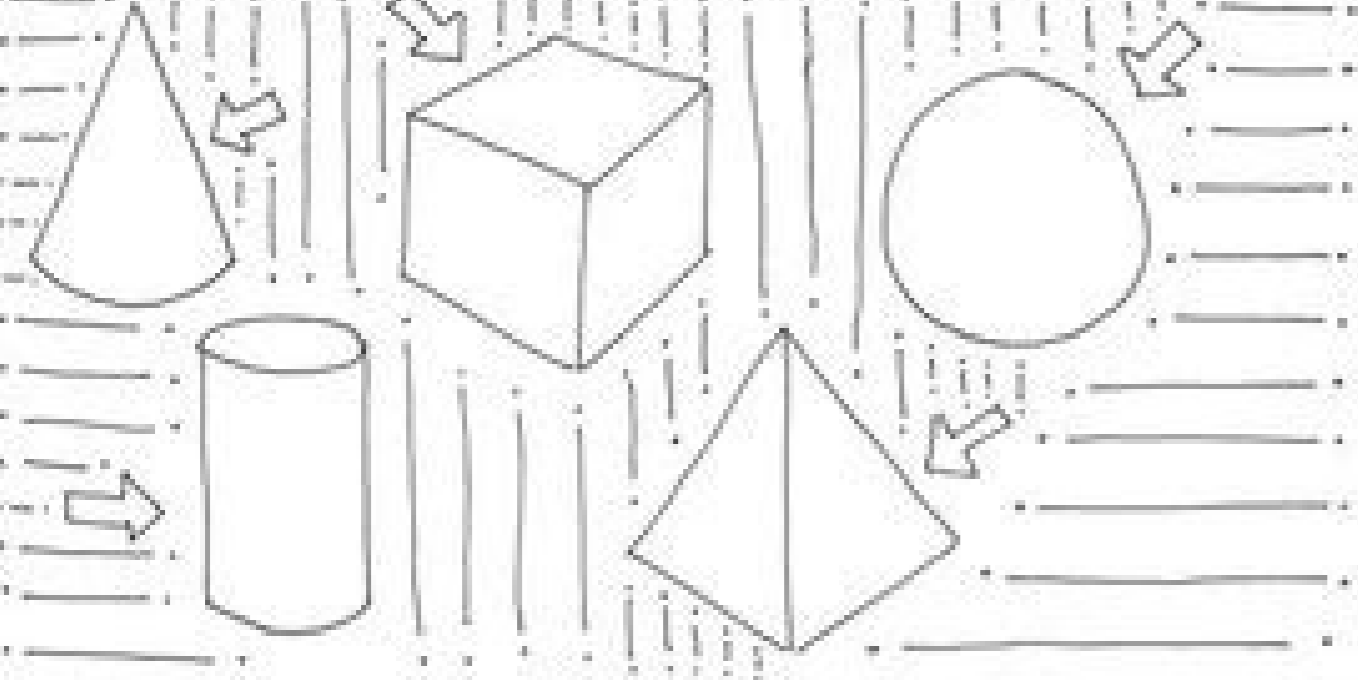
# VALUE elements of art

Fill out the worksheet. Reference the front if you need help!

--	--	--	--	--	--

darkest → Create your own VALUE SCALE ← lightest

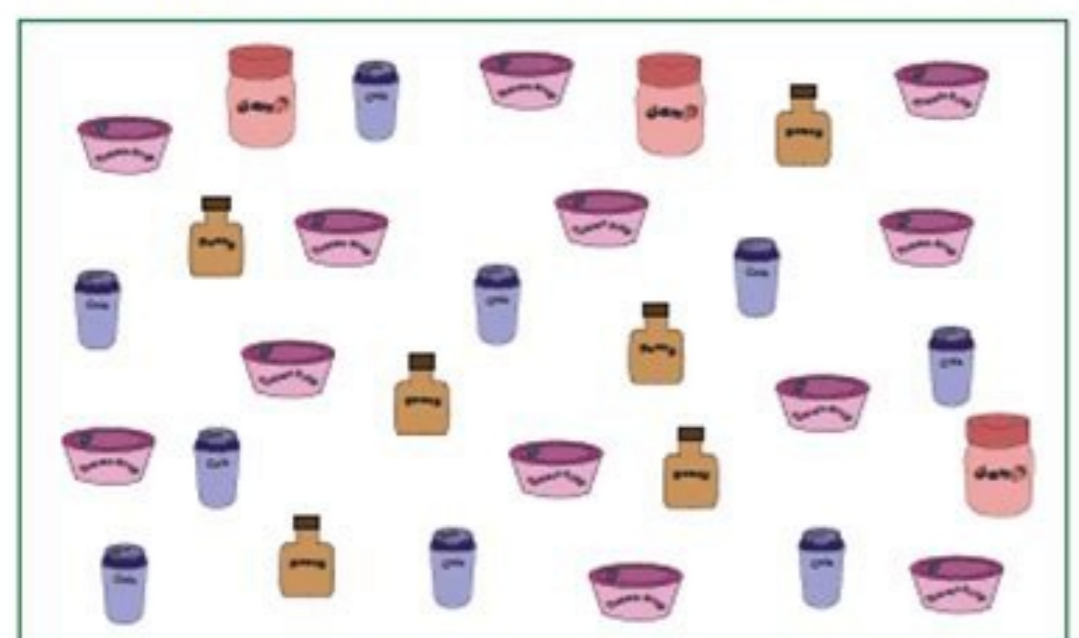
Shade the shapes using five different shading techniques. The arrows point to the highlight area.



Name: \_\_\_\_\_ Score: \_\_\_\_\_

## Pictograph - Grocery

Using the key, draw the pictograph to show the number of items in each kind.



Grocery Graph	
Item	Number of Items

Key  
 = 3 Items

Please draw and shade each of the forms to match the examples below.

<p>Draw your forms:</p> <p>Sphere</p>	<p>Sphere</p>	Sphere
<p>Cube</p>	<p>Cube</p>	Cube
<p>Pyramid</p>	<p>Pyramid</p>	Pyramid
<p>Cone</p>	<p>Cone</p>	Cone
<p>Draw your forms:</p> <p>Cylinder</p>	<p>Shade your forms:</p> <p>Cylinder</p>	Cylinder
<p>Now it's your turn:</p>		



